



Math 118 - Spring 2023 - Common Final Exam, version A

Print name: _____

Section number: _____ Instructor's name: _____

Directions:

- This exam has 13 questions. Please check that your exam is complete, but otherwise keep this page closed until the start of the exam is called.
- Fill in your name, and your instructor's name.
- It will be graded out of 100 points.
- Show your work. Answers (even correct ones) without the corresponding work will receive no credit.
- A formula sheet has been provided with this exam. You may not refer to any other notes during the exam.
- You may use a calculator which does not allow internet access. The use of any notes or electronic devices other than a calculator is prohibited.
- **Unless otherwise stated, round any constants to two decimal places if necessary.**

Good luck!

Question:	1	2	3	4	5	6	7
Points:	9	9	7	3	6	8	8
Score:							
Question:	8	9	10	11	12	13	Total
Points:	12	6	6	9	8	9	100
Score:							

3. (7 points) Consider the exponential function $Q = 4.2(0.182)^t$.

(a) Give the initial value, growth factor, and growth rate for the given function.

The initial value is _____

The growth factor is _____

The growth rate is _____

(b) Write the given function in the form $Q = ae^{kt}$.

(c) Determine if this function displays exponential growth or decay. Explain your answer in a sentence.

Circle one: **exponential growth** or **exponential decay**.

4. (3 points) Give the domain and range for the function $f(x) = 12e^{-2.3x}$.

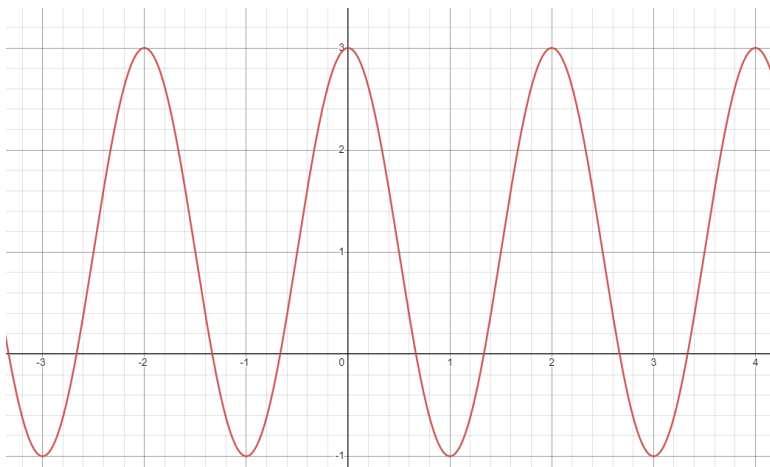
The domain is _____

The range is _____

5. (6 points) The chemistry department discovers a new element called "Lucnium" and wants to find out more about it. Lucnium decays at a continuous rate of 8% per hour. Find the half-life of Lucnium. Make sure to include units in your answer.

6. (8 points) On August 22, 2022 high tide in Chicago was at midnight. The water level at high tide was 9.6 feet; later, at low tide, it was 0.4 feet. Assume the next high tide is at exactly 1 PM.
- (a) Use a sinusoidal function to model the height of the water level in Chicago on August 22nd, 2022 as a function of time, t , the number of hours since midnight.
- (b) Write an equation for the first time the tide is 7 feet high after midnight. Find a solution to this equation, giving your answer in terms of an inverse trig function and evaluate with correct units.

7. (8 points) Find a formula of the trigonometric function shown in the graph below.



8. (12 points) For angles α and β such that $0 < \alpha < \frac{\pi}{2}$ and $\frac{\pi}{2} < \beta < \pi$ such that $\sin(\alpha) = \frac{3}{5}$ and $\cos(\beta) = -\frac{2}{7}$. Find the given quantities without finding α and β . Give an exact answer.

(a) $\cos(\alpha)$

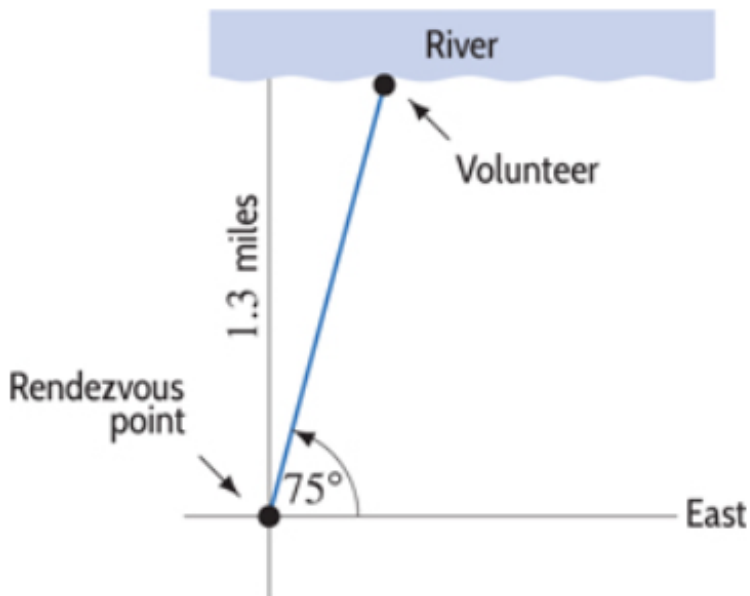
(b) $\sin(\beta)$

(c) $\sin(\alpha + \beta)$

(d) $\cos(\alpha + \beta)$

9. (6 points) Determine if the identity $(\sin^2(\theta) + \cos^2(\theta))(\tan(\theta) \cot(\theta)) + 4 \cos(\theta) \sec(\theta) = 5$ is true (that is, for any value of θ). Show work to support your answer.

10. (6 points) A search and rescue volunteer leaves a rendezvous point in the Arizona desert walking 75 degrees north of east. She reaches a river that runs east-west and is located 1.3 miles directly north of the rendezvous point. See the figure below. How far east of the rendezvous point is the volunteer when she reaches the river? Make sure to include units in your answer.



11. (9 points) Let $P = f(t) = 600(1.328)^t$ be the population of people that live in a town, where t is measured in years since 2020.

(a) Evaluate $f(6)$. Round to the nearest whole number. Describe in words what this quantity represents. Write your answer in a complete sentence with units.

(b) Find a formula for $f^{-1}(P)$ in terms of P . Give an exact answer.

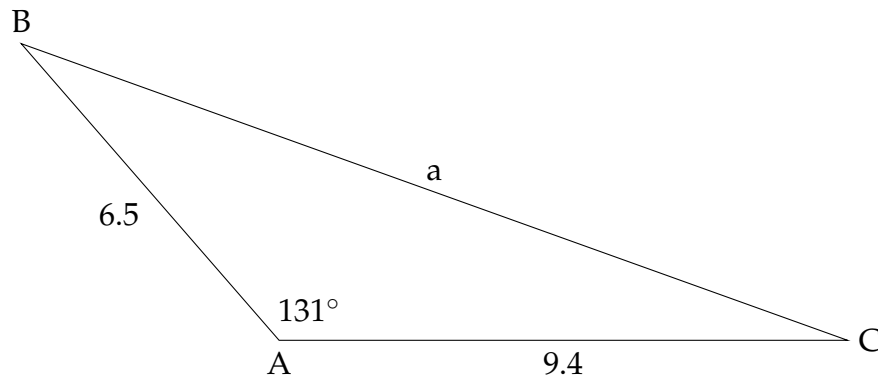
(c) Evaluate $f^{-1}(2000)$. Round to the nearest whole number. Describe in words what this quantity represents. Write your answer in a complete sentence with units.

12. (8 points) Let $f(x) = 2x + 5$, $g(x) = 3x - 9$ and $h(x) = \ln(x)$. Find the following:

(a) $f(g(4))$

(b) $h(f(g(x)))$

13. (9 points) Find the length of the missing side, a , and the missing angle measures, B and C , in the diagram below. Give angles as degrees.



Exponential and Logarithm Formulas

Linear Function: $Q(t) = mt + b$

Exponential Function: $Q(t) = a \cdot b^t$

Continuous Exponential Function: $Q(t) = a \cdot e^{kt}$

Simple Interest: $B = P(1 + r)^t$

Compound Interest: $B = P \left(1 + \frac{r}{n}\right)^{nt}$

Trigonometry Formulas

1 radian = $\frac{180}{\pi}$ degrees and 1 degree = $\frac{\pi}{180}$ radians

$$\sin(\theta) = \frac{\text{opp}}{\text{hyp}} = \frac{y}{r} \quad \cos(\theta) = \frac{\text{adj}}{\text{hyp}} = \frac{x}{r} \quad \tan(\theta) = \frac{\text{opp}}{\text{adj}} = \frac{y}{x} = \frac{\sin(\theta)}{\cos(\theta)}$$

$$\csc(\theta) = \frac{1}{\sin(\theta)} \quad \sec(\theta) = \frac{1}{\cos(\theta)} \quad \cot(\theta) = \frac{1}{\tan(\theta)} = \frac{\cos(\theta)}{\sin(\theta)}$$

Pythagorean Identities: $\sin^2(\theta) + \cos^2(\theta) = 1$ $\tan^2(\theta) + 1 = \sec^2(\theta)$ $1 + \cot^2(\theta) = \csc^2(\theta)$

Sum and Difference Formulas:

$$\sin(A + B) = \sin(A) \cos(B) + \cos(A) \sin(B)$$

$$\sin(A - B) = \sin(A) \cos(B) - \cos(A) \sin(B)$$

$$\cos(A + B) = \cos(A) \cos(B) - \sin(A) \sin(B)$$

$$\cos(A - B) = \cos(A) \cos(B) + \sin(A) \sin(B)$$

Even-Odd Identities: $\sin(-x) = -\sin(x)$ and $\cos(-x) = \cos(x)$

Other identities: $\sin(\theta) = \sin(180^\circ - \theta)$, $\cos(\theta) = -\cos(180^\circ - \theta)$ and $\tan(\theta) = -\tan(180^\circ - \theta)$

General form for sine and cosine: $f(t) = A \sin(Bt) + k$ and $f(t) = A \cos(Bt) + k$

General form with horizontal shift: $f(t) = A \sin(B(t - h)) + k$ and $f(t) = A \cos(B(t - h)) + k$

Period for sine and cosine: $P = \frac{2\pi}{|B|}$

Law of Sines: $\frac{\sin(A)}{a} = \frac{\sin(B)}{b} = \frac{\sin(C)}{c}$

Law of Cosines: $c^2 = a^2 + b^2 - 2ab \cos(C)$

Arc Length: $s = r\theta$

Inverse Trig Functions

$\theta = \cos^{-1}(y)$ provided that $y = \cos(\theta)$ and $0 \leq \theta \leq \pi$

$\theta = \sin^{-1}(y)$ provided that $y = \sin(\theta)$ and $-\frac{\pi}{2} \leq \theta \leq \frac{\pi}{2}$

$\theta = \tan^{-1}(y)$ provided that $y = \tan(\theta)$ and $-\frac{\pi}{2} < \theta < \frac{\pi}{2}$

Polar coordinates conversions

$r^2 = x^2 + y^2$, $\tan(\theta) = \frac{y}{x}$, $x = r \cos(\theta)$, $y = r \sin(\theta)$

The Unit Circle

